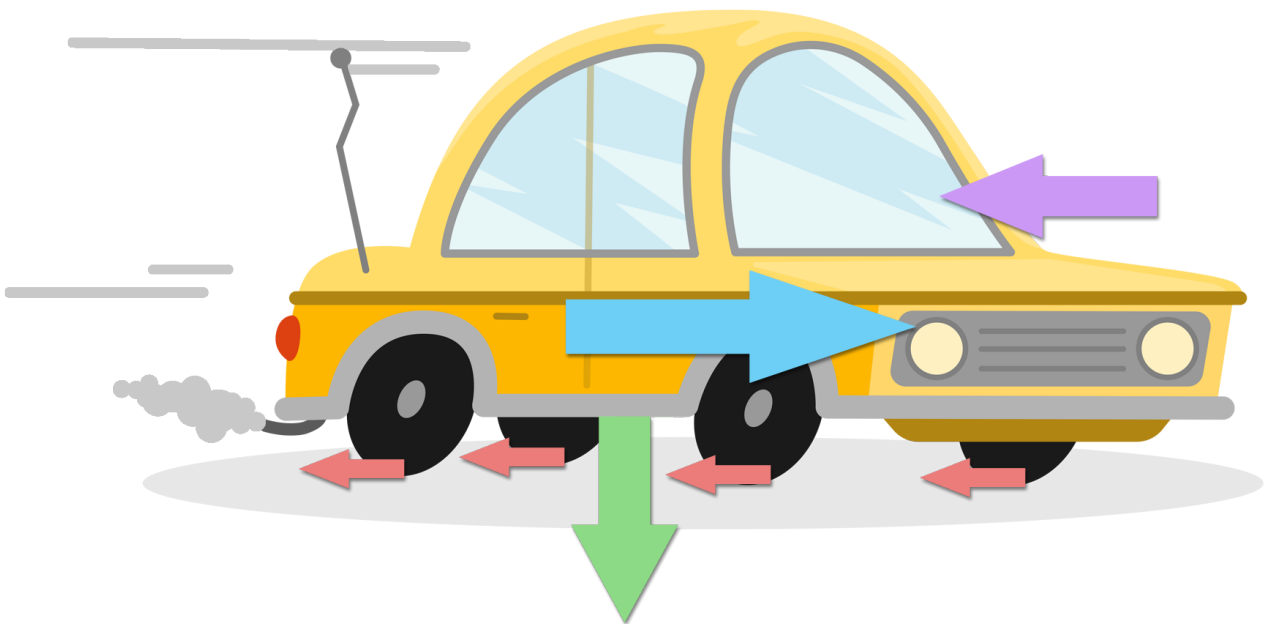




## Live Lesson: Activity 1 - Forces acting on a car

The car in the diagram below is moving ahead at a steady speed. Can you correctly label the forces that are acting on it?



	<input type="text"/>
	<input type="text"/>
	<input type="text"/>
	<input type="text"/>

### Forces:

- Weight
- Driving force
- Friction
- Air resistance

Send us your answers and they could be featured on our Live Lesson on the 19<sup>th</sup> of June.

Simply ask your teacher to email them to [live.lessons@bbc.co.uk](mailto:live.lessons@bbc.co.uk) or use the hashtag **#bbclivelessons**.